





















Name _____ Date _____



Pot of Gold

Gold Found By Each Leprechaun.							
Kristina							
Nick							
Alicia							
Evan							
Griffin							
Roman							
 Each  equals 2 pieces of gold.							

Answer the Questions. Use the graph.

- Who found the most gold? _____
- Who found more gold Evan or Roma? _____
- Who found six less pieces of gold than Nick? _____
- Who found the least amount of gold? _____
- Who found four pieces of gold? _____
- How much gold did the Leprechauns find altogether? _____
- Kristina and Nick put all their gold into one pot, how much gold altogether? _____